

# 2<sup>nd</sup> Grade Summer Reading

**Requirement #1:** Choose one of the books below to read and complete the following book report sheet. See attached book report page for directions.

Mercy Watson to the Rescue by Kate DiCamillo

Nate the Great by Marjorie Sharmat

Get Ready for Second Grade, Amber Brown by Paula Danziger

**Rubric (22 points total):**

1 point for book title

1 point for Author

1 point for main character drawing

4 points for sentences about main character (1 point per capital letter & punctuation)

12 points for summary sentences (1 point per capital letter & punctuation)

1 point for rating of the book

2 points for recommendation answer and why or why not


# Reading Project information Sheet

Student Name \_\_\_\_\_

Book Title: \_\_\_\_\_

Author/Illustrator: \_\_\_\_\_

Main Character(s): Draw a picture & write 2 sentences describing him/her.



\_\_\_\_\_

\_\_\_\_\_

\_\_\_\_\_

\_\_\_\_\_

Summary of book (6 sentences): \_\_\_\_\_

\_\_\_\_\_

\_\_\_\_\_

\_\_\_\_\_

\_\_\_\_\_

\_\_\_\_\_

\_\_\_\_\_

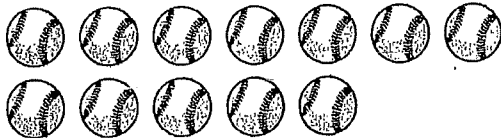
Rate this book: 

Would you recommend this book? Why or why not? \_\_\_\_\_


\_\_\_\_\_

Name \_\_\_\_\_

1. Dan has 7 baseballs.  
Leah has 5 baseballs.  
Which equation shows how many more baseballs Dan has than Leah?

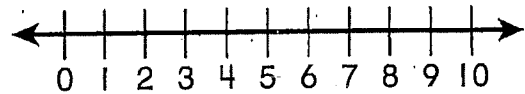


- (A)  $5 + 3 = ?$   
(B)  $7 - 5 = ?$   
(C)  $5 - 3 = ?$   
(D)  $7 + 2 = ?$
2. Which related addition fact can be used to find  $11 - 6$ ?



- (A)  $5 + 6 = 11$   
(B)  $10 + 1 = 11$   
(C)  $5 + 1 = 6$   
(D)  $6 + 6 = 12$

3. Find  $4 + 3$ .  
Use the number line to count on.



- (A) 5  
(B) 6  
(C) 7  
(D) 8
4. Trina has 7 more bracelets than Sara.  
Sara has 8 bracelets.  
How many bracelets does Trina have?

Which equation can help you solve the problem?

- (A)  $8 - 7 = ?$   
(B)  $? + 7 = 8$   
(C)  $8 + ? = 16$   
(D)  $8 + 7 = ?$

Name \_\_\_\_\_

5. Rick counts beads by 1s.  
He counts to 110.  
Which number will Rick  
say next?


- (A) 112
- (B) 111
- (C) 109
- (D) 101

6. Lakisha has 5 red marbles,  
9 blue marbles, and  
3 yellow marbles.  
How many marbles does  
Lakisha have in all?

$$5 + 9 + 3 = \underline{\quad ? \quad}$$


- (A) 8
- (B) 12
- (C) 14
- (D) 17

7. Look at the picture graph.  
How many fewer cats than  
dogs are there?



- (A) 1
- (B) 2
- (C) 3
- (D) 5

8. 31 is   ?   groups of 10 and  
1 left over.



- (A) 2
- (B) 3
- (C) 10
- (D) 30

Name \_\_\_\_\_

9. Which number makes the equation true?




$$17 = ? + 9$$

- (A) 25
- (B) 9
- (C) 8
- (D) 7

10. Which is a true equation?

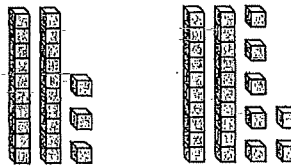
- (A)  $4 + 7 = 6 + 6$
- (B)  $14 - 6 = 9 + 1$
- (C)  $6 + 6 = 7 + 5$
- (D)  $16 - 9 = 5 + 3$

11. Ray asked his friends about their favorite snack. He made this tally chart to show the results. How many friends took Ray's survey?

| Favorite Snack  |                 |
|---|-----------------|
|  Apple   | <del>    </del> |
|  Yogurt  | <del>    </del> |
|  Pretzel |                 |

- (A) 7
- (B) 12
- (C) 15
- (D) 16


12. Which correctly compares the two sets of place-value blocks?



- (A)  $23 > 27$
- (B)  $23 < 27$
- (C)  $23 = 27$
- (D)  $27 < 23$

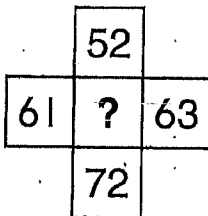
Name \_\_\_\_\_

13. Use the place-value blocks.  
Find the difference.



$$60 - 40 = \underline{\hspace{2cm}}$$

- (A) 2
  - (B) 20
  - (C) 30
  - (D) 40
14. Which number completes the part of the hundred chart?



- (A) 53
- (B) 60
- (C) 62
- (D) 71

15. Which is a way to show sixteen?


- (A) 1 ten and 6 ones
- (B) 1 ten and 16 ones
- (C) 6 tens and 1 one
- (D) 16 tens

16. Celia has 46 buttons.  
Her brother gives her  
10 more buttons.  
How many buttons does  
Celia have now?

- (A) 36
- (B) 47
- (C) 50
- (D) 56

Name \_\_\_\_\_

17. Which equation matches the place-value blocks below?



- (A)  $35 + 10 = 45$
- (B)  $35 + 15 = 50$
- (C)  $35 + 18 = 53$
- (D)  $35 + 19 = 54$

18. The equation  $8 + 7 = 15$  is true.

Which one of these equations is also true?

- (A)  $7 + 8 = 14$
- (B)  $7 + 8 = 15$
- (C)  $7 + 8 = 16$
- (D)  $7 + 8 = 17$

19. Which word describes Line K?


Line J \_\_\_\_\_

Line K \_\_\_\_\_

Line L \_\_\_\_\_

- (A) longest
- (B) bottom
- (C) tallest
- (D) shortest


20. Which could be used to find the length of the spoon?



- (A) cup
- (B) balance
- (C) clock
- (D) paper clips

Name \_\_\_\_\_

21. What time is shown on the clock?



- (A) 12:30
- (B) 1:30
- (C) 6:00
- (D) 6:30

22. Which shape shows halves?

- (A)
- (B)
- (C)
- (D)

23. All of these shapes are triangles. Which is true of all triangles?



- (A) They have 4 sides.
- (B) They have 3 vertices.
- (C) They are gray.
- (D) They are **NOT** closed.

24. How many does Ivan need to make a ?

- (A) 2
- (B) 3
- (C) 4
- (D) 6